

**Bronx Community College of City University of New York
Department of Mathematics and Computer Science**

MATH 13 REVIEW SHEET

- Find the x and y components A_x and A_y of the given vectors. Round to an appropriate decimal place according to the number given in each problem.
 (a) $A = 1.884, \theta = 58.24^\circ$ (b) $A = 24.15, \theta = 350^\circ$ (c) $A = 55.0, \theta = 122^\circ$
- Add the vectors $9\angle 35^\circ, 45\angle 256^\circ$, and $56\angle 300^\circ$, and find the magnitude and the direction of the resultant vector to the nearest tenth.
- A space shuttle is moving in orbit at 18,250 mph. A satellite is launched to the rear at 150 mph at an angle of 6.75° from the direction of the shuttle. Find the velocity of the satellite.
- A river flows at the rate of 5 km/h, A rower who can travel 7.6 km/h in stillwater, heads directly across the current. Find the rate and direction of travel of the boat to the nearest tenth.
- To avoid a storm, a plane flies 125 mi south, then 85 mi at 35.0° south of west, and finally 240 mi at 48.0° north of west. What is the displacement of the plane from its original position?
- Perform the indicated operations. Express all answers in the form $a + bj$.
 (a) $5 + \sqrt{-\frac{16}{25}} - \sqrt{-25} + 3$ (b) $(34 + 8j) - (6 - j)$ (c) $(6 + j)(4 - 2j)$ (d) $\frac{5 - 2j}{1 - 2j}$
 (e) $j^{17} - 7j^8$
- For each given complex number fill in the blank. Give answers in exact values whenever possible.

rectangular form	polar form	exponential form
$2 - \sqrt{5}j$		
		$6e^{\frac{j\pi}{4}}$
	$2\angle 150^\circ$	

- Perform the following indicated operations and give the answers in appropriate form:
 (a) $(6e^{2.3j})(2e^{-2.3j})$ (b) $\frac{20(\cos 35^\circ + j \sin 35^\circ)}{4(\cos 55^\circ + j \sin 55^\circ)}$ (c) $(2\angle 54^\circ)^6$ (d) $(\frac{1}{2} - \frac{\sqrt{3}}{2}j)^{10}$
- Find all three cube roots of $-27j$ and express your answers in standard polar form.
 - Find all four 4th roots of $-\frac{1}{2} + \frac{\sqrt{3}}{2}j$ and express your answers in rectangular form.

10. Find the real values of x and y satisfying the equation:

(a) $5 - (2y)j = 6j - (x - 1)$ (b) $(x^2 - 2x) + yj = 3 + (y^2)j$

11. Let $f(x) = \frac{9 - x^2}{2x}$, find $f(\sqrt{5})$, $f(-2)$, $f(0)$, and $f(x - 3)$.

12. Determine the domain of each function.

(a) $y = \frac{x}{x^2 - 9}$ (b) $y = \sqrt{x - 3} - 2$ (c) $y = 2x^2 - 4x + 6$ (d) $y = 4^x$ (e) $y = \log_3 x$

13. Sketch the graph of each equation.

(a) $y = -x^2 + 2x - 3$ (b) $y = \sqrt{4 - x}$

14. Sketch the graph of each of the following function.

(a) $f(x) = 2^x$ (b) $f(x) = \left(\frac{1}{2}\right)^x$ (c) $g(x) = \log_2 x$

15. Fill in the blank.

exponential form	$2^{-3} = \frac{1}{8}$			$x^y = z$
logarithmic form		$\ln x = 2.1$	$\log 0.001 = -3$	

16. Write each logarithm as the sum or difference of two or more terms:

(a) $\log_5 135$ (b) $\log \left(\frac{5a^3x}{3 - y} \right)$ (c) $\ln \sqrt{\frac{xy + y}{x^2 - 1}}$

17. Simplify each expression to a single logarithm:

(a) $3 \ln 5 - 5 \ln 3$ (b) $\log 4 + \frac{\log x}{2} - 2 \log y - \log \frac{3}{4}$

18. Solve for x

(a) $2^x = 3^{x-1}$ (b) $\log 2x + \log 5x = 1$ (c) $3 \log(2x - 1) = 2$ (d) $2e^{2x-1} = e^{5x}$

19. Write the amplitude, period, and phase shift of y . Draw one cycle of the graph and label the coordinates of the maximum, minimum and intercept points.

(a) $y = -3 \cos(2\pi x)$ (b) $y = 2 \sin(2x + \pi)$ (c) $y = -2 \cos\left(\frac{x}{2} - \frac{\pi}{2}\right)$ (d) $y = -2 \tan(4x - 3)$

20. Prove each identity:

$$\begin{array}{ll} \text{(a)} (\tan x + \cot x) \sin x \cos x = 1 & \text{(b)} \sec x + \tan x + \cot x = \frac{1 + \sin x}{\cos x \sin x} \\ \text{(c)} \frac{\sin(x-y)}{\sin(x+y)} = \frac{\tan x - \tan y}{\tan x + \tan y} & \text{(d)} \cos 2x = \frac{1 - \tan^2 x}{1 + \tan^2 x} \end{array}$$

21. Solve the given equations for all values of $0 \leq x < 2\pi$.

$$\begin{array}{lll} \text{(a)} 2 \cos^2 x = \cos x & \text{(b)} 2 \cos^2 x - \sin x - 1 = 0 & \text{(c)} (\tan x - 1)(\tan x - \sqrt{3}) = 0 \\ \text{(d)} \sin 2x \sin x = \cos x & & \end{array}$$

22. Find the value of each determinant. Simplify your answers whenever possible.

$$\begin{array}{llll} \text{(a)} \begin{vmatrix} \cos \theta & -\sin \theta \\ \sin \theta & \cos \theta \end{vmatrix} & \text{(b)} \begin{vmatrix} \sqrt{2} & 2 \\ \sqrt{6} & \sqrt{3} \end{vmatrix} & \text{(c)} \begin{vmatrix} 1 & 2 & 3 \\ 1 & 2 & 3 \\ 8 & 9 & 4 \end{vmatrix} & \text{(d)} \begin{vmatrix} \tan \theta & -\tan \theta \\ \tan \theta & \cot \theta \end{vmatrix} \\ \text{(e)} \begin{vmatrix} e^0 & e^{\sin^2 x} \\ e^{\cos^2 x} & e \end{vmatrix} & & & \end{array}$$

23. Use Cramer's rule to solve each linear system.

$$\begin{array}{ll} \text{(a)} \begin{cases} 4x + y + 3z = -5 \\ 2x + -2y + 6z = 6 \\ x + 3y + 3z = 11 \end{cases} & \text{(b)} \begin{cases} a + b + -3c = 7 \\ -2a + b + 2c = -1 \\ a + 4b + c = 12 \end{cases} \end{array}$$

Answers

1. (a) $A_x = 0.992, A_y = 1.602$ (b) $A_x = 23.78, A_y = -4.19$ (c) $A_x = -29.1, A_y = 46.6$

2. $A = 90.4, \theta = 285.7^\circ$

3. 18,101.04 mph and 0.0558° from the direction of the shuttle.

4. $v = 9.1\text{km/h}$, and $\theta = 33.3^\circ$ away from the original direction of the boat

5. 230 miles, 178.9° or 1.1° north of west.

6. (a) $8 - \frac{21}{5}j$ (b) $28 + 9j$ (c) $26 - 8j$ (d) $\frac{9}{5} + \frac{8}{5}j$ (e) $-7 + j$

	rectangular form	polar form	exponential form
7.	$2 - \sqrt{5}j$	$3\angle 312^\circ$	$3e^{5.44j}$
	$3\sqrt{2} - 3\sqrt{2}j$	$6\angle 315^\circ$	$6e^{\frac{7\pi}{4}j}$
	$-\sqrt{3} + j$	$2\angle 150^\circ$	$2e^{\frac{5\pi}{6}j}$

8. (a) 12 (b) $5(\cos 340^\circ + j \sin 340^\circ)$ (c) $64\angle 324^\circ$ (d) $-\frac{1}{2} + \frac{\sqrt{3}}{2}j$

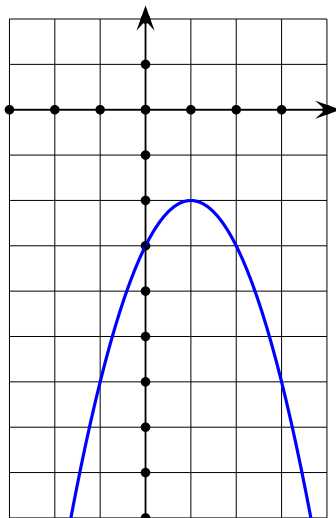
9. (a) $3\angle 90^\circ, 3\angle 210^\circ, 3\angle 330^\circ$ (b) $\frac{\sqrt{3}}{2} + \frac{1}{2}j, -\frac{1}{2} + \frac{\sqrt{3}}{2}j, -\frac{\sqrt{3}}{2} - \frac{1}{2}j, \frac{1}{2} - \frac{\sqrt{3}}{2}j$

10. (a) $x = -4; y = -3$ (b) $x = 3, -1; y = 0, 1$

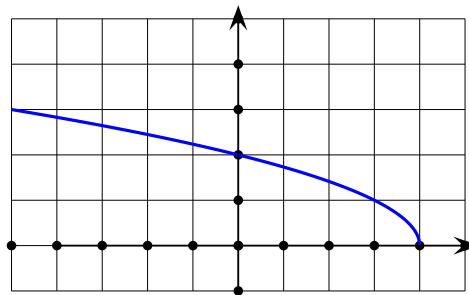
11. $f(\sqrt{5}) = \frac{2\sqrt{5}}{5}; f(-2) = -\frac{5}{4}; f(0)$ is undefined; $f(x-3) = \frac{-x^2+6x}{2x-6}$

12. (a) all real numbers except $-3, +3$ or $(-\infty, -3) \cup (-3, +3) \cup (+3, +\infty)$
 (b) $[3, +\infty)$ (c) $(-\infty, +\infty)$ (d) $(-\infty, +\infty)$ (e) $(0, +\infty)$

13.

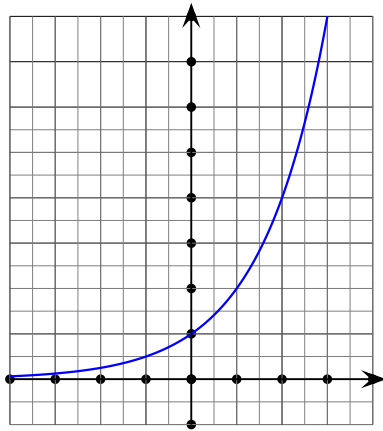


(a)

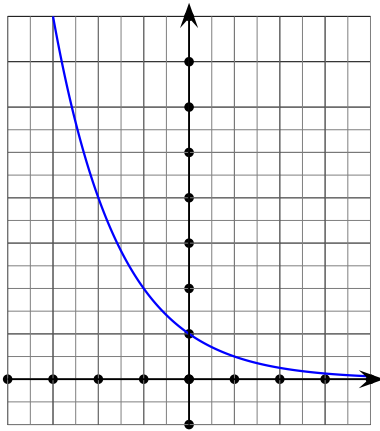


(b)

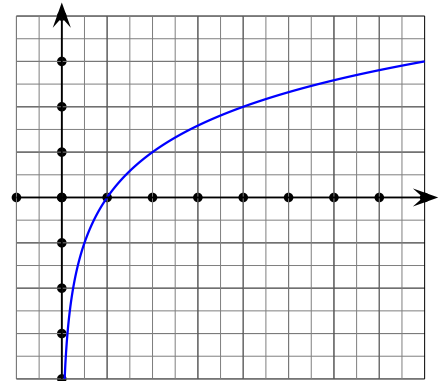
14.



(a)



(b)



(c)

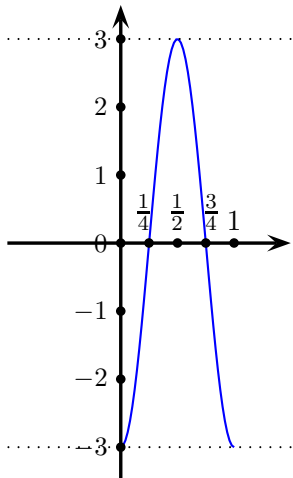
exponential form	$2^{-3} = \frac{1}{8}$	$e^{2.1} = x$	$10^{-3} = 0.001$	$x^y = z$
logarithmic form	$\log_2(\frac{1}{8}) = -3$	$\ln x = 2.1$	$\log 0.001 = -3$	$\log_x z = y$

16. (a) $1 + 3 \log_5 3$ (b) $\log 5 + 3 \log a + \log x - \log(3 - y)$ (c) $\frac{1}{2} \ln y - \frac{1}{2} \ln(x - 1)$

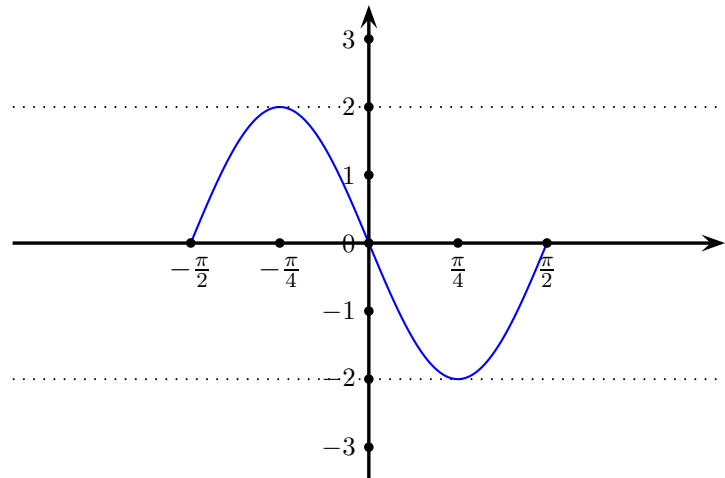
17. (a) $\ln\left(\frac{125}{243}\right)$ (b) $\log\left(\frac{16\sqrt{x}}{3y^2}\right)$

18. (a) $\frac{-\ln 3}{\ln(\frac{2}{3})}$ or $\frac{\ln 3}{\ln(\frac{3}{2})}$ (b) 1 (c) $\frac{1 + \sqrt[3]{100}}{2}$ (d) $\frac{\ln 2 - 1}{3}$

19.

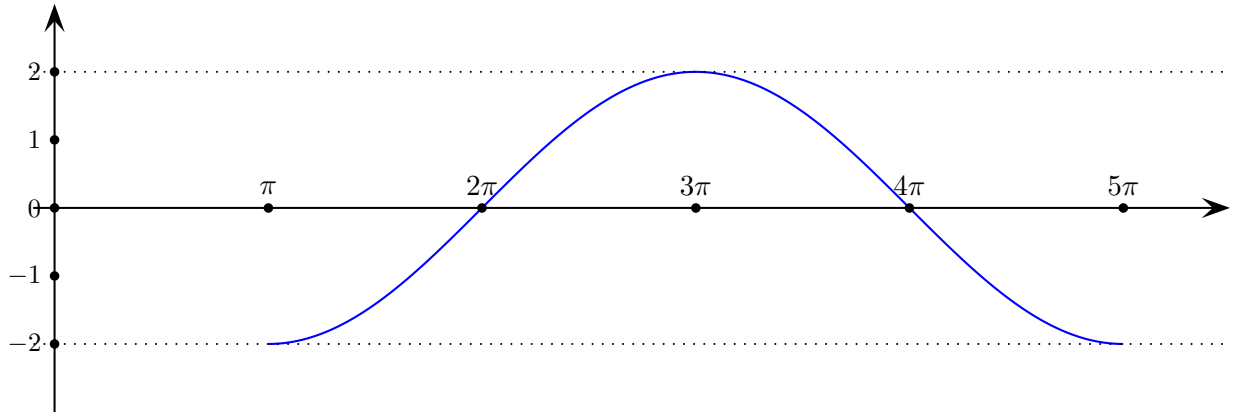


(a) $A = 3; P = 1; ps = 0$

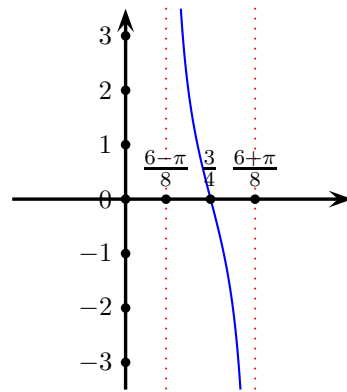


(b) $A = 2; P = \pi; ps = -\frac{\pi}{2}$

(c) $A = 2; P = 4\pi; ps = \pi$



(d) No amplitude, $P = \frac{\pi}{4}; ps = \frac{3}{4}$



21. (a) $\frac{\pi}{3}, \frac{\pi}{2}, \frac{3\pi}{2}, \frac{5\pi}{2}$ (b) $\frac{\pi}{6}, \frac{5\pi}{6}, \frac{3\pi}{2}$ (c) $\frac{\pi}{4}, \frac{5\pi}{4}, \frac{\pi}{3}, \frac{4\pi}{3}$ (d) $\frac{\pi}{2}, \frac{3\pi}{2}, \frac{\pi}{4}, \frac{3\pi}{4}, \frac{5\pi}{4}, \frac{7\pi}{4}$

22. (a) 1 (b) $-\sqrt{6}$ (c) 0 (d) $\sec^2 \theta$ (e) 0

23. (a) $(-4, 2, 3)$ (b) $(1, 3, -1)$

N.A. 2010, P.Y. 2012