

MTH 06, Test 2, V. 3, 10/12/21

Prof. Luis Fernández

NAME: _____

There are 22 questions. Some are multiple choice and some are free response.
Each question is worth 5 points over 100 (so 10 points are extra credit).
For multiple-choice questions, just circle your answer.
For free-response questions, SHOW ALL WORK to receive credit.

1. Add: $(7x^3 - 4x^2 + 4x - 2) + (5x^3 - 7x^2 + x - 6)$

2. Subtract: $(3t^7 + 6t^5 - t^3 - 1) - (5t^7 - 3t^5 + 2t^3 + 3)$

3. What is the solution to the following system of equations?

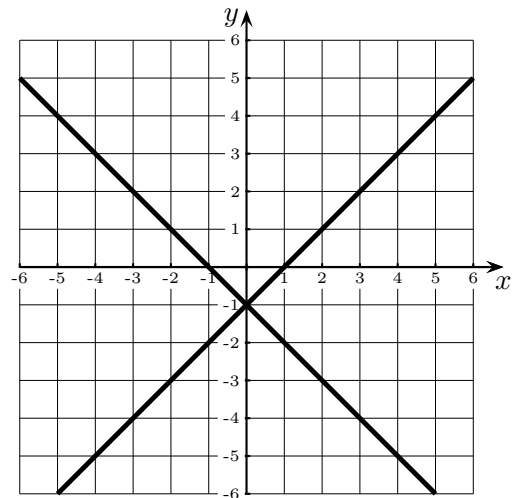
$$\begin{cases} -2x + 4y = -21 \\ -8x + 16y = -72 \end{cases}$$

Circle the answer.

- (a) No solution
- (b) $(3, 0)$
- (c) $(7, -4)$
- (d) Infinitely many solutions

4. The graphs of two linear equations in a system is shown below.

Find the solution of the system of equations. If there is no solution or there are infinitely many solutions, write it.



5. Subtract: $(6x^2 + 4x - 4) - (-7x^2 - 4x - 5)$

6. Find the x and y intercepts of the graph of the equation $y = x + 6$.

The x intercept is: _____

The y intercept is: _____

7. Given the function $f(x) = 3x^2 + 5x - 2$, calculate the following values:

• $f(0) =$ _____

• $f(2) =$ _____

• $f(-2) =$ _____

• $f(x + 1) =$ _____

• $f(-x) =$ _____

8. Solve the following system of equations.

$$\begin{cases} -3x + 2y = -10 \\ -5x + 3y = -17 \end{cases}$$

9. For the polynomial $x^2 + x^5 - 3x - 5$,
a) Determine the coefficient and the degree of each term.

Term	Coefficient	Degree
x^2		
x^5		
$-3x$		
-5		

- b)
The degree of the polynomial is _____,
The leading term is _____ ,
The leading coefficient is _____ .

10. Simplify the expression $\frac{30x^{14}y^{17}z^{17}}{6x^9y^{12}z^{14}}$

11. Simplify the expression $(3x^6y^3)(7x^{15}y^{11})$

12. Simplify the expression $\left(\frac{10x^4y^3}{5x^6y^{-3}}\right)^4$

13. Write in scientific notation:

63400000

14. Write in decimal notation

$$5.4 \times 10^{-4} = \underline{\hspace{2cm}}$$

15. Divide and write in scientific notation:

$$\frac{1.2 \times 10^3}{4.8 \times 10^7}$$

Circle the answer

(a) 0.25×10^{-4}

(b) 2.5×10^{-5}

(c) 4×10^{10}

(d) 4×10^{-5}

16. Multiply the polynomials: $(x - 1)(x + 3)$

17. Square the binomial: $(x - 5)^2$.

18. Multiply: $(6x - 6)(x^2 + 2x + 3)$

Circle the answer

(a) $6x^3 + 18x^2 + 18x - 18$

(b) $6x^3 + 6x^2 + 6x - 18$

(c) $6x^3 + 18x^2 + 6x - 18$

(d) $6x^3 + 6x^2 + 18x - 18$

19. Write in scientific notation.

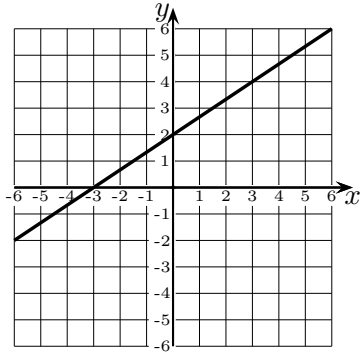
0.0039

20. Simplify the numerical expression

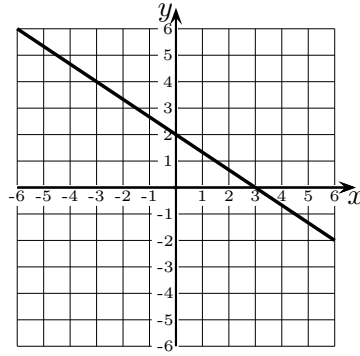
$$\left(\frac{10}{11}\right)^0.$$

21. Which of the following is the graph of the equation $2x - 3y = -6$? (Circle the answer).

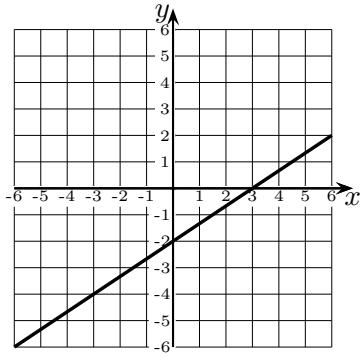
(a)



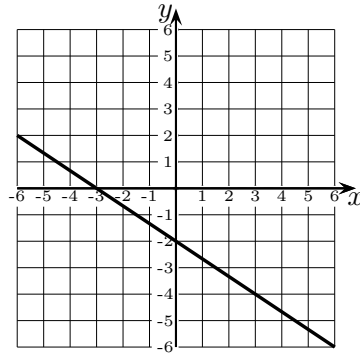
(c)



(b)

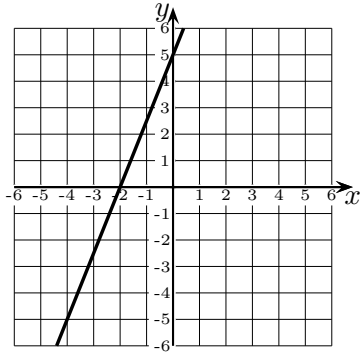


(d)

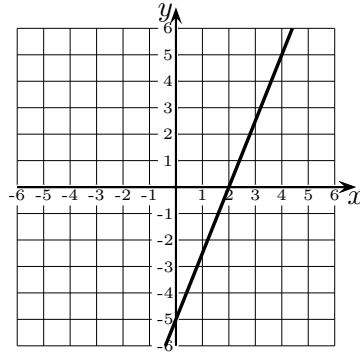


22. Which of the following is the graph of the equation $10x - 4y = 20$? (Circle the answer).

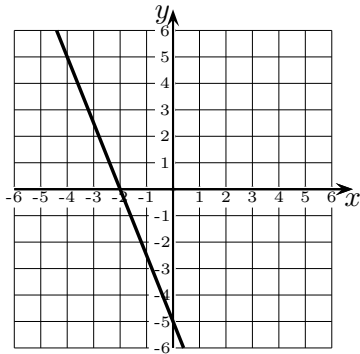
(a)



(c)



(b)



(d)

